

Combined Higher Secondary Level (10+2) Examination-2018

Roll No.	
Registration No.	
Name	
Test Venue	iON Digital Zone iDZ 1 Sector 62
Test Time	1:00 PM - 2:00 PM
Test Date	09/07/2019

Section : General Intelligence

Q.1 Which letter-pair will replace the question mark (?) in the following series?

BE, DG, FK, HQ, ?

- Ans
- ☒ 1. JY
 - ☐ 2. JX
 - ☐ 3. JS
 - ☐ 4. YJ

Question ID : 98958016936

Status : Answered

Chosen Option : 1

Q.2 Select the number-pair in which the two numbers are related in the same way as are the two numbers of the following number-pair.

7 : 56

- Ans
- ☐ 1. 13 : 173
 - ☐ 2. 11 : 121
 - ☒ 3. 9 : 90
 - ☐ 4. 6 : 36

Question ID : 98958016944

Status : Answered

Chosen Option : 3

Q.3 Dev is the brother of Sneha and son of Mayank. Swati is the sister of Sneha. How is Mayank related to Swati?

- Ans
- ☐ 1. Son
 - ☐ 2. Brother
 - ☒ 3. Father
 - ☐ 4. Sister

Question ID : 98958016937

Status : Answered

Chosen Option : 3

Q.4 The age of a father is twice the age of his son. Five years ago, the father's age was thrice the age of the son then. What is the age of the son now?

- Ans
- ☐ 1. 15 years

☒ 2. 20 years

☒ 3. 10 years

☒ 4. 12 years

Question ID : 98958016942

Status : Answered

Chosen Option : 3

Q.5 Select the correct mirror image of the given figure when the mirror is placed to the right of the figure.



Ans

☒ 1.



☒ 2.



☒ 3.



☒ 4.



Question ID : 98958016954

Status : Answered

Chosen Option : 4

Q.6 Select the set in which the numbers are related in the same way as are the numbers of the following set.

(5, 8, 89)

Ans

☒ 1. (7, 10, 149)

☒ 2. (2, 5, 19)

☒ 3. (3, 4, 7)

☒ 4. (6, 9, 60)

Question ID : 98958016946

Status : Answered

Chosen Option : 1

Q.7 Select the set in which the numbers are related in the same way as are the numbers of the following set.

(16, 64, 8)

Ans

☒ 1. (15, 60, 8)

☒ 2. (18, 90, 6)

✗ 3. (10, 80, 8)

✗ 4. (14, 62, 4)

Question ID : 98958016945

Status : Answered

Chosen Option : 1

Q.8 Select the option that is related to the third letter-cluster in the same way as the second letter-cluster is related to the first letter-cluster.

BEH : FJN :: ILO : ?

Ans ✓ 1. MQU

✗ 2. MQV

✗ 3. MOU

✗ 4. MOV

Question ID : 98958016934

Status : Answered

Chosen Option : 2

Q.9 Two statements are given, followed by three conclusions numbered I, II and III. Assuming the statements to be true, even if they seem to be at variance with commonly known facts, decide which of the conclusions logically follow(s) from the statements.

Statements:

All cocks are bears.

All bears are horses.

Conclusions:

I. Some bears are cocks.

II. Some horses are cocks.

III. All cocks are horses.

Ans ✗ 1. Only conclusions I and II follow.

✗ 2. Only conclusions II and III follow.

✗ 3. Only conclusions I follow.


✓ 4. All the conclusions follow.

Question ID : 98958016941

Status : Answered

Chosen Option : 4

Q.10 How many triangles are present in the following figure?



Ans ✓ 1. 8

✗ 2. 7

✗ 3. 10

✗ 4. 5

Question ID : 98958016951

Status : **Answered**
Chosen Option : 1

Q.11 Three of the following four words are alike in a certain way and one is different.
Pick the odd word out.

- Ans
-  1. Bark
 -  2. Bleat
 -  3. Frog
 -  4. Moo

Question ID : **98958016940**
Status : **Answered**
Chosen Option : 3

Q.12 Select the word-pair in which the two words are related in the same way as are the two words in the following word-pair.

Tortoise : Reptile

- Ans
-  1. Snake : Amphibian
 -  2. Shark : Mammal
 -  3. Spider : Reptile
 -  4. Snail : Mollusk

Question ID : **98958016938**
Status : **Answered**
Chosen Option : 2

Q.13 Which two signs should be interchanged in the following equation to make it correct?

$$15 + 8 - 20 \times 10 \div 5 = 13$$

- Ans
-  1. + and -
 -  2. \times and -
 -  3. \times and \div
 -  4. + and \div

Question ID : **98958016943**
Status : **Answered**
Chosen Option : 3

Q.14 Three of the following four letter-clusters are alike in a certain way and one is different.
Pick the odd one out.

- Ans
-  1. PRKI
 -  2. LNOM
 -  3. STHI
 -  4. CEXV

Question ID : **98958016939**
Status : **Answered**
Chosen Option : 3


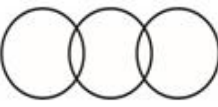


Q.15 In a code language, GLUCOSE is written as DJTCPUH. How will SUCROSE be written as in that language?

- Ans ☒ 1. PSBRPUH
☒ 2. PSBSPUH
☒ 3. PSBRPVH
☒ 4. PSBTPUH

Question ID : 98958016932
Status : Answered
Chosen Option : 1

Q.16 Select the Venn diagram that best illustrates the relationship between the following classes.

Heart, Body, House

- Ans ☒ 1. 
☒ 2. 
☒ 3. 
☒ 4. 

Question ID : 98958016955
Status : Answered
Chosen Option : 1

Q.17 If BOOK is coded as 24411 and EQUATION is coded as 21751203414, then how will FOOTBALL be coded as?

- Ans ☒ 1. 64420212212
☒ 2. 64420221212
☒ 3. 61520211212
☒ 4. 64420211212

Question ID : 98958016933
Status : Not Answered
Chosen Option : --

Q.18 Arrange the following words in a logical and meaningful order.

1. Pupa
2. Death
3. Larva
4. Butterfly
5. Egg

- Ans ☒ 1. 5, 3, 1, 2, 4
☒ 2. 5, 3, 1, 4, 2
☒ 3. 3, 1, 2, 4, 5

 4. 3, 1, 4, 2, 5

Question ID : 98958016931
Status : Answered
Chosen Option : 2

Q.19 Which number will replace the question mark (?) in the following series?

6, 7, 11, 20, ?

- Ans  1. 29
 2. 32
 3. 35
 4. 36

Question ID : 98958016947
Status : Answered
Chosen Option : 4

Q.20 'Sunflower' is related to 'Yellow' in the same way as 'Blood' is related to '_____'.

- Ans  1. Animal
 2. Human
 3. Red
 4. Iron









Question ID : 98958016935
Status : Answered
Chosen Option : 3

Q.21 Select the option in which the given figure (X) is embedded.



X

Ans

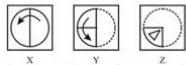
-  1. 
-  2. 
-  3. 
-  4. 

Question ID : 98958016952

Status : Answered

Chosen Option : 1

Q.22 A paper is folded and cut as shown in the following figures (X, Y and Z). Select the option that depicts how this paper will appear when unfolded?



Ans

✓ 1.



✗ 2.



✗ 3.



✗ 4.



Question ID : 98958016953

Status : Answered

Chosen Option : 1

Q.23 Three of the following four numbers are alike in a certain way and one is different. Pick the number that is different from the rest.

Ans ✗ 1. 47

✓ 2. 57

✗ 3. 67

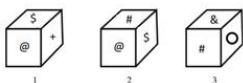
✗ 4. 37

Question ID : 98958016948

Status : Answered

Chosen Option : 2

Q.24 Three different positions of the same dice are shown. Select the pattern that will be on the face opposite to the one having '+',.



Ans ✓ 1. #

✗ 2. \$

✗ 3. &

✗ 4. ○

Question ID : 98958016949

Status : Answered

Chosen Option : 1

Q.25 Select the Answer Fig. that will come next in the following Problem Fig. series.

Problem Fig.



Ans

✗ 1.

✗ 2.

✓ 3.

✗ 4.

Question ID : 98958016950

Status : Answered

Chosen Option : 3

Section : General Awareness

Q.1 The term 'Jamming' is associated with which of the following sports?

Ans ✗ 1. Boxing

✗ 2. Swimming

✓ 3. Lawn Tennis

✗ 4. Cricket

Question ID : 98958016623

Status : Answered

Chosen Option : 1

Q.2 _____ created history and became the first Indian medalist at the 2003 World Athletics Championships in Paris when she won a bronze medal in women's the long jump (6.70 m).

Ans ✗ 1. Dutee Chand

✓ 2. Anju Bobby George

✗ 3. KM Beenamol

✗ 4. Jyotirmoyee Sikdar

Question ID : 98958016625

Status : Not Answered

Chosen Option : --

Q.3 The _____ is the longest river in Sri Lanka.

- Ans
- ☐ 1. Kelani
 - ☐ 2. Maha
 - ☒ 3. Mahaweli
 - ☐ 4. Kalu

Question ID : 98958016613

Status : Answered

Chosen Option : 4

Q.4 Which city in Pakistan is called the 'Gardens of the Mughals or City of Gardens'?

- Ans
- ☐ 1. Peshawar
 - ☐ 2. Multan
 - ☐ 3. Karachi
 - ☒ 4. Lahore

Question ID : 98958016616

Status : Not Answered

Chosen Option : --

Q.5 Jhijhia dance originated in the Indian state of _____.

- Ans
- ☒ 1. Bihar
 - ☐ 2. West Bengal
 - ☐ 3. Rajasthan
 - ☐ 4. Gujarat

Question ID : 98958016605

Status : Answered

Chosen Option : 1

Q.6 Who was the first Indian to cross the English Channel?

- Ans
- ☒ 1. Mihir Sen
 - ☐ 2. Sachin Nag
 - ☐ 3. Virdhawal Khade
 - ☐ 4. Sufyun Shaikh

Question ID : 98958016624

Status : Answered

Chosen Option : 1

Q.7 Pandit Budhaditya Mukherjee is associated with which of the following musical instruments?

- Ans
- ☐ 1. Tabla
 - ☒ 2. Sitar
 - ☐ 3. Veena
 - ☐ 4. Flute

Question ID : 98958016620

Status : **Not Answered**
Chosen Option : --

Q.8 As of April 2019, who is the Chairman of the joint working group of IRDA and NHA, formed to curb fraud in the Ayushman Bharat Pradhan Mantri Jan Arogya Yojana (AB-PMJAY)?

- Ans ☒ 1. Dinesh Arora
☒ 2. Indu Bhushan
☒ 3. Subhash C. Khuntia
☒ 4. Nilesh Sathe

Question ID : **98958016626**
Status : **Not Answered**
Chosen Option : --

Q.9 The first defence minister of independent India was:

- Ans ☒ 1. C Rajagopalachari
☒ 2. Baldev Singh
☒ 3. Shri Jagjivan Ram
☒ 4. Sardar Vallabhbhai Patel

Question ID : **98958016621**
Status : **Answered**
Chosen Option : **3**

Q.10 Dogri language is mainly spoken in which of the following states/union territories?

- Ans ☒ 1. Jammu and Kashmir
☒ 2. Dadra and Nagar Haveli
☒ 3. Mizoram
☒ 4. Tripura

Question ID : **98958016604**
Status : **Not Answered**
Chosen Option : --

Q.11 In computing, _____ is a network security system that monitors and controls incoming and outgoing network traffic based on predetermined security rules.

- Ans ☒ 1. cookie
☒ 2. spyware
☒ 3. spam
☒ 4. firewall

Question ID : **98958016611**
Status : **Answered**
Chosen Option : **4**

Q.12 In which year the administration of India was transferred into the hands of the British Monarch by the Proclamation of Queen Victoria?

- Ans ☒ 1. 1887
☒ 2. 1842
☒ 3. 1864

✓ 4. 1858

Question ID : 98958016617
Status : Not Answered
Chosen Option : --

Q.13 As of June 2019, _____ in Madhya Pradesh recorded the highest temperature, at 46.6°C, in the world.

- Ans
- ✗ 1. Burhanpur
 - ✗ 2. Satna
 - ✓ 3. Khargone
 - ✗ 4. Rewa

Question ID : 98958016614
Status : Not Answered
Chosen Option : --

Q.14 Aapka bhala, sabki bhalai' is the tag line of _____ bank.

- Ans
- ✗ 1. HDFC Bank
 - ✗ 2. Canara Bank
 - ✓ 3. Bandhan Bank
 - ✗ 4. State Bank of India

Question ID : 98958016606
Status : Not Answered
Chosen Option : --

Q.15 Who among the following invented the World Wide Web (www) in 1989?

- Ans
- ✗ 1. Bill Gates
 - ✗ 2. Steve Wozniak
 - ✓ 3. Tim Berners-Lee
 - ✗ 4. Charles Babbage

Question ID : 98958016612
Status : Answered
Chosen Option : 3

Q.16 The book titled 'Social Harmony' is written by:

- Ans
- ✗ 1. Lal Krishna Advani
 - ✓ 2. Narendra Modi
 - ✗ 3. Shyama Prasad Mukherjee
 - ✗ 4. Atal Bihari Vajpayee

Question ID : 98958016619
Status : Not Answered
Chosen Option : --

Q.17 The thin layer of living cells just inside the bark of a tree is called _____.

- Ans
- ✗ 1. Pith

- ☒ 2. Crown
- ☒ 3. Xylem
- ☒ 4. Cambium

Question ID : 98958016608
Status : Not Answered
Chosen Option : --

Q.18 Japan's second highest national award called 'The Order of the Rising Sun, Gold and Silver Star' was conferred on _____ in 2019.

- Ans ☒ 1. Shyam Saran
- ☒ 2. Rajeshwar Dayal
 - ☒ 3. JS Mehta
 - ☒ 4. Kewal Singh

Question ID : 98958016628
Status : Not Answered
Chosen Option : --

Q.19 Which of the following Indian rulers was defeated by Mahmud Ghazni in his first attack in the year 1001 AD?

- Ans ☒ 1. Anandpal
- ☒ 2. Chandrapal
 - ☒ 3. Jaipal
 - ☒ 4. Sukhpal

Question ID : 98958016618
Status : Not Answered
Chosen Option : --

Q.20 What is the solid crust or the hard top layer of the earth called?

- Ans ☒ 1. Mantle
- ☒ 2. Lithosphere
 - ☒ 3. Biosphere
 - ☒ 4. Hydrosphere

Question ID : 98958016615
Status : Answered
Chosen Option : 2

Q.21 The SI unit of radioactivity is _____.

- Ans ☒ 1. ampere
- ☒ 2. becquerel
 - ☒ 3. decibel
 - ☒ 4. cobolt

Question ID : 98958016610
Status : Answered
Chosen Option : 2

Q.22 In 2019, the Indian Space Research Organisation's (ISRO) new commercial arm called NewSpace India Limited (NSIL) was officially inaugurated in the city of _____.

- Ans
- ☒ 1. Mumbai
 - ☒ 2. Bengaluru
 - ☒ 3. Chennai
 - ☒ 4. Ranchi

Question ID : 98958016627
Status : Marked For Review
Chosen Option : 2

Q.23 The _____ shows all the combinations of two commodities that a consumer can afford at given market prices and within the particular income level.

- Ans
- ☒ 1. Utility line
 - ☒ 2. Supply line
 - ☒ 3. Demand line
 - ☒ 4. Budget line

Question ID : 98958016607
Status : Not Answered
Chosen Option : --

Q.24 Tears in the eyes are produced by which of the following glands?

- Ans
- ☒ 1. Lacrimal gland
 - ☒ 2. Thyroid gland
 - ☒ 3. Pituitary gland
 - ☒ 4. Hypothalamus gland

Question ID : 98958016609
Status : Marked For Review
Chosen Option : 4

Q.25 Who among the following is the longest serving President of India?

- Ans
- ☒ 1. Neelam Sanjiva Reddy
 - ☒ 2. Shankar Dayal Sharma
 - ☒ 3. Rajendra Prasad
 - ☒ 4. R Venkatraman

Question ID : 98958016622
Status : Answered
Chosen Option : 3

Section : Quantitative Aptitude

Q.1 A earns ₹100 per hour and works for 8 hours per day. B earns ₹120 per hour and works for 6 hours per day. The ratio of per day wages of B to that of A is:

- Ans
- ☒ 1. 10 : 9
 - ☒ 2. 4 : 5
 - ☒ 3. 5 : 4

✓ 4. 9 : 10

Question ID : 98958017338

Status : Answered

Chosen Option : 4

Q.2 The distance between the centres of two circles of radius 6 cm each is 13 cm. The length (in cm) of a transverse common tangent is:

Ans ✗ 1. 10

✗ 2. 12

✓ 3. 5

✗ 4. 6

Question ID : 98958017345

Status : Answered

Chosen Option : 3

Q.3 The simplified value of $\frac{46 + \frac{3}{4} \text{ of } 32 - 6}{11 + \frac{3}{4} \text{ of } (34 - 6)}$ is:

Ans ✗ 1. 1

✗ 2. $\frac{1}{4}$

✓ 3. 2

✗ 4. $\frac{1}{2}$

Question ID : 98958017341

Status : Answered

Chosen Option : 3

Q.4 If $\cos x = \frac{-\sqrt{3}}{2}$ and $\pi < x < \frac{3\pi}{2}$, then the value of $4\cot^2 x - 3\operatorname{cosec}^2 x$ is:

Ans ✗ 1. 8

✓ 2. 0

✗ 3. 2

✗ 4. 1

Question ID : 98958017351

Status : Answered

Chosen Option : 2

Q.5 If $7(\operatorname{cosec}^2 57^\circ - \tan^2 33^\circ) + 2\sin 90^\circ - 4\tan^2 52^\circ \tan^2 38^\circ = \frac{y}{2}$, then the value of y is:

Ans ✓ 1. 2

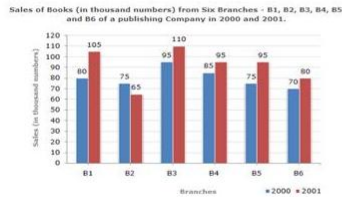
✗ 2. 4

✗ 3. 1

✗ 4. 3

Question ID : 98958017349

Q.6 The given Bar Graph presents the sales of the number of books (in thousands) by six branches of a publishing company during two consecutive years 2000 and 2001.

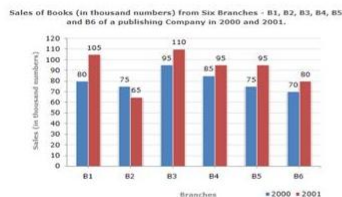


The ratio of total sales by all branches for the year 2001 to total sales by all branches for the year 2000 is:

- Ans ☒ 1. 48 : 55
☒ 2. 25 : 23
☒ 3. 55 : 48
☒ 4. 23 : 25

Question ID : **98958017354**
Status : **Answered**
Chosen Option : 3

Q.7 The given Bar Graph presents the sales of the number of books (in thousands) by six branches of a publishing company during two consecutive years 2000 and 2001.

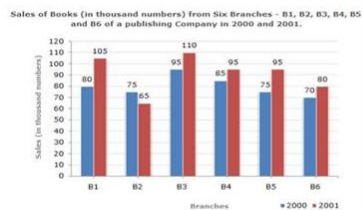


The average of total sales (in thousands and Correct to two decimal places) by all branches for both the years is:

- Ans ☒ 1. 171.37
☒ 2. 171.57
☒ 3. 171.27
☒ 4. 171.67


Question ID : **98958017355**
Status : **Answered**
Chosen Option : 4

Q.8 The given Bar Graph presents the sales of the number of books (in thousands) by six branches of a publishing company during two consecutive years 2000 and 2001.



The ratio of total sales by branches B1, B3 and B5 for both the years to total sales by branches B2, B4, B6 for both the years is:

- Ans ☒ 1. 21 : 23
☒ 2. 56 : 47

 3. 23 : 21

 4. 47 : 56


Question ID : 98958017352

Status : Answered


Chosen Option : 2

Q.9 The sum of the salaries of A and B is ₹42,000. A spends 75% of his salary and B spends 90% of his salary. Now their savings are the same. What is A's salary (in ₹)?

Ans  1. 18,000

 2. 12,000

 3. 30,000

 4. 15,000

Question ID : 98958017336

Status : Answered


Chosen Option : 2

Q.10 ABCD is a cyclic quadrilateral such that AB is a diameter of the circle circumscribing it and angle $ADC = 146^\circ$. $\angle BAC$ is equal to:

Ans  1. 56°

 2. 24°

 3. 72°

 4. 18°


Question ID : 98958017346


Status : Answered

Chosen Option : 1

Q.11 A dealer buys an article marked at ₹5000 with two successive discounts of 20% and 5%. He spends ₹200 on repairs and sells it for ₹5000, what is his profit/loss percent?

Ans  1. 25% profit

 2. 25% loss

 3. 20% profit


 4. 20% loss


Question ID : 98958017335


Status : Answered

Chosen Option : 1

Q.12 If the length of a rectangle is decreased by 11% and the breadth is increased by 11%, its area will undergo:

Ans  1. 13.13% increase

 2. 1.21% increase

 3. 1.21% decrease

 4. 13.13% decrease

Question ID : 98958017333

Status : Answered

Chosen Option : 3

Q.13 If $x - \frac{1}{x} = 7$, then $x^3 - \frac{1}{x^3}$ is equal to

- Ans
- ☒ 1. 480
 - ☒ 2. 364
 - ☒ 3. 376
 - ☒ 4. 500

Question ID : 98958017343

Status : Answered

Chosen Option : 2

Q.14 In $\triangle ABC$, $\angle A = 72^\circ$. Its sides AB and AC are produced to the points D and E respectively. If the bisectors of the $\angle CBD$ and $\angle BCE$ meet at point O, then $\angle BOC$ is equal to:

- Ans
- ☒ 1. 16°
 - ☒ 2. 54°
 - ☒ 3. 32°
 - ☒ 4. 106°

Question ID : 98958017347

Status : Answered

Chosen Option : 2

Q.15 A and B can complete a piece of work in 15 days and 20 days respectively. They got a contract to complete the work for ₹77000. The share of A (in ₹) in the contracted money will be:

- Ans
- ☒ 1. 45,000
 - ☒ 2. 40,000
 - ☒ 3. 44,000
 - ☒ 4. 42,000

Question ID : 98958017331

Status : Answered

Chosen Option : 3

Q.16 Let $\triangle ABC \sim \triangle PQR$ and $\frac{\text{ar}(\triangle ABC)}{\text{ar}(\triangle PQR)} = \frac{4}{25}$. If $AB = 12$ cm, $BC = 8$ cm and $AC = 10$ cm, then QP is equal to:

- Ans
- ☒ 1. 20
 - ☒ 2. 18
 - ☒ 3. 15
 - ☒ 4. 30

Question ID : 98958017348

Status : Answered

Chosen Option : 4

Q.17 A man bought three articles for ₹6,000 each. He sold the articles respectively at 15% profit, 12% profit and 15% loss. The total percentage profit/loss he earned is:

- Ans
- ☒ 1. 4% profit
 - ☒ 2. 3% loss

☒ 3. 4% loss

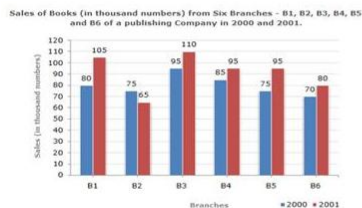
☒ 4. No profit no loss

Question ID : 98958017337

Status : Answered

Chosen Option : 1

Q.18 The given Bar Graph presents the sales of the number of books (in thousands) by six branches of a publishing company during two consecutive years 2000 and 2001.



The total sales (in thousands) by all branches for both the years is:

Ans ☒ 1. 470

☒ 2. 560

☒ 3. 1100

☒ 4. 1030

Question ID : 98958017353

Status : Answered

Chosen Option : 4

Q.19 If $\sec \theta = 8x$ and $\tan \theta = \frac{8}{x}$ ($x \neq 0$), then the value of $16 \left(x^2 - \frac{1}{x^2} \right)$ is:

Ans ☒ 1. $\frac{1}{4}$

☒ 2. $\frac{1}{16}$

☒ 3. $\frac{1}{3}$

☒ 4. $\frac{1}{2}$

Question ID : 98958017350

Status : Answered

Chosen Option : 1

Q.20 The compound interest on a certain sum of money at 21% for 2 years is ₹11,602.5. Its simple interest (in ₹) at the same rate and for the same period is:

Ans ☒ 1. 10,750

☒ 2. 16,000

☒ 3. 12,500

☒ 4. 10,500

Question ID : 98958017339

Status : Answered

Chosen Option : 1

Q.21 The ratio between the speeds of two trains is 2 : 5. If the first train runs 250 km in 5 h, then the sum of the speeds (in km/h) of both the trains is:

- Ans ☒ 1. 175
☒ 2. 150
☒ 3. 180
☒ 4. 165

Question ID : 98958017332

Status : Answered

Chosen Option : 1

Q.22 If $x^4 + x^{-4} = 1154$, ($x > 0$), then the value of $2(x - 3)^2$ is:

- Ans ☒ 1. 16
☒ 2. 12
☒ 3. 20
☒ 4. 15

Question ID : 98958017342

Status : Answered

Chosen Option : 1

Q.23 If the seven digit number $64x29y6$ ($x > y$) is divisible by 72, what is the value of $(2x - y)$?

- Ans ☒ 1. 3
☒ 2. 13
☒ 3. 7
☒ 4. 9

Question ID : 98958017340

Status : Answered

Chosen Option : 4

Q.24 The average age of fifteen persons is 32 years. If two more persons are added then the average is increased by 3 years. The new persons have an age difference of 11 years between them. The age (in years) of the younger among the new persons is:

- Ans ☒ 1. 63
☒ 2. 52
☒ 3. 50
☒ 4. 58

Question ID : 98958017334

Status : Answered

Chosen Option : 2

Q.25 If $a^3 - b^3 = 899$ and $a - b = 29$, then $(a - b)^2 + 3ab$ is equal to:

- Ans ☒ 1. 35
☒ 2. 29
☒ 3. 16

Question ID : 98958017344
Status : Answered
Chosen Option : 4

Section : English Language

Q.1 Select the most appropriate antonym of the given word.

TACIT

- Ans
- ☒ 1. inaudible
 - ☒ 2. silent
 - ☒ 3. mute
 - ☒ 4. explicit

Question ID : 98958016263
Status : Answered
Chosen Option : 4

Q.2 Select the most appropriate synonym of the given word.

Meddle

- Ans
- ☒ 1. manage
 - ☒ 2. interfere
 - ☒ 3. repair
 - ☒ 4. elaborate

Question ID : 98958016260
Status : Not Answered
Chosen Option : --

Comprehension:

In the following passage some words have been deleted. Fill in the blanks with the help of the alternatives given. Select the most appropriate option for each blank.

Long before the dawn of modern environmental awareness and the stress on recycling, our forefathers developed the practice of eating off banana leaves. It is a timeless practice (1) _____ in every Vedic ritual. The Vedas refer to (2) _____ sacred properties of the banana plant, (3) _____ uniquely bears fruit without pollination, the fruits containing no (4) _____. The plant thus (5) _____ fertility and plenty.

SubQuestion No : 3

Q.3 Select the most appropriate option to fill in blank No.1.

- Ans
- ☒ 1. brought
 - ☒ 2. read
 - ☒ 3. found
 - ☒ 4. said

Question ID : 98958016253
Status : Answered
Chosen Option : 3

Comprehension:

In the following passage some words have been deleted. Fill in the blanks with the help of the

alternatives given. Select the most appropriate option for each blank.

Long before the dawn of modern environmental awareness and the stress on recycling, our forefathers developed the practice of eating off banana leaves. It is a timeless practice (1) _____ in every Vedic ritual. The Vedas refer to (2) _____ sacred properties of the banana plant, (3) _____ uniquely bears fruit without pollination, the fruits containing no (4) _____. The plant thus (5) _____ fertility and plenty.

SubQuestion No : 4

Q.4 Select the most appropriate option to fill in blank No.2.

- Ans
- ☒ 1. an
 - ☒ 2. one
 - ☒ 3. the
 - ☒ 4. a

Question ID : 98958016254

Status : Answered

Chosen Option : 3

Comprehension:

In the following passage some words have been deleted. Fill in the blanks with the help of the alternatives given. Select the most appropriate option for each blank.

Long before the dawn of modern environmental awareness and the stress on recycling, our forefathers developed the practice of eating off banana leaves. It is a timeless practice (1) _____ in every Vedic ritual. The Vedas refer to (2) _____ sacred properties of the banana plant, (3) _____ uniquely bears fruit without pollination, the fruits containing no (4) _____. The plant thus (5) _____ fertility and plenty.

SubQuestion No : 5

Q.5 Select the most appropriate option to fill in blank No.3.

- Ans
- ☒ 1. which
 - ☒ 2. where
 - ☒ 3. whom
 - ☒ 4. who

Question ID : 98958016255

Status : Answered

Chosen Option : 1

Comprehension:

In the following passage some words have been deleted. Fill in the blanks with the help of the alternatives given. Select the most appropriate option for each blank.

Long before the dawn of modern environmental awareness and the stress on recycling, our forefathers developed the practice of eating off banana leaves. It is a timeless practice (1) _____ in every Vedic ritual. The Vedas refer to (2) _____ sacred properties of the banana plant, (3) _____ uniquely bears fruit without pollination, the fruits containing no (4) _____. The plant thus (5) _____ fertility and plenty.

SubQuestion No : 6

Q.6 Select the most appropriate option to fill in blank No.4.

- Ans
- ☒ 1. branches
 - ☒ 2. seeds
 - ☒ 3. leaves
 - ☒ 4. roots

Question ID : 98958016256

Status : Answered




Comprehension:

In the following passage some words have been deleted. Fill in the blanks with the help of the alternatives given. Select the most appropriate option for each blank.

Long before the dawn of modern environmental awareness and the stress on recycling, our forefathers developed the practice of eating off banana leaves. It is a timeless practice (1) _____ in every Vedic ritual. The Vedas refer to (2) _____ sacred properties of the banana plant, (3) _____ uniquely bears fruit without pollination, the fruits containing no (4) _____. The plant thus (5) _____ fertility and plenty.

SubQuestion No : 7

Q.7 Select the most appropriate option to fill in blank No.5.

- Ans  1. refers
 2. explains
 3. symbolises
 4. means


Question ID : 98958016257

Status : Not Answered

Chosen Option : --

Q.8 Select the most appropriate antonym of the given word.

PROCEED

- Ans  1. ahead
 2. recede
 3. forward
 4. continue





Question ID : 98958016262

Status : Answered

Chosen Option : 2

Q.9 Select the correct passive form of the given sentence.

They are going to open the shops at eleven o'clock.

- Ans  1. The shops must be opened at eleven o'clock.
 2. The shops were opened at eleven o'clock.
 3. The shops are going to be opened at eleven o'clock.
 4. The shops have been opened at eleven o'clock.





Question ID : 98958016248

Status : Answered

Chosen Option : 3

Q.10 Identify the segment in the sentence which contains the grammatical error.

The young girl was helping her father to look after shop.

- Ans  1. her father
 2. The young girl
 3. was helping
 4. to look after shop

Question ID : 98958016246
Status : Answered
Chosen Option : 4

Q.11 Select the most appropriate meaning of the given idiom

dark horse

- Ans
- ☒ 1. someone who is fond of horse racing
 - ☒ 2. someone who has a wheatish complexion
 - ☒ 3. someone who breeds race horses
 - ☒ 4. someone who unexpectedly succeeds

Question ID : 98958016265
Status : Answered
Chosen Option : 4

Q.12 Identify the segment in the sentence which contains the grammatical error.

When we went to Ramgarh we see the snow-capped mountains in the distance.

- Ans
- ☒ 1. in the distance
 - ☒ 2. to Ramgarh we see
 - ☒ 3. the snow-capped mountains
 - ☒ 4. When we went

Question ID : 98958016247
Status : Answered
Chosen Option : 3

Q.13 Select the most appropriate meaning of the given idiom

hand in glove

- Ans
- ☒ 1. working together in the same office
 - ☒ 2. wearing gloves while working
 - ☒ 3. in partnership for something dishonest
 - ☒ 4. doing work in the garden

Question ID : 98958016264
Status : Answered
Chosen Option : 3

Q.14 Select the wrongly spelt word

- Ans
- ☒ 1. presidential
 - ☒ 2. preferential
 - ☒ 3. profesional
 - ☒ 4. proverbial

Question ID : 98958016269
Status : Answered
Chosen Option : 3

Q.15 Given below are four jumbled sentences. Out of the given options pick the one that gives

their correct order.

- A. His affectionate greeting was surprising.
- B. Although we were from the same village our relationship was confined to a polite hello whenever our paths crossed.
- C. As I stepped into the shack, Dorababu beckoned to me, making a little space for me on the bench on which he was sitting.
- D. "Come here, brother," he greeted me.

- Ans
- ☒ 1. DBCA
 - ☒ 2. CABD
 - ☒ 3. BACD
 - ☒ 4. CDAB

Question ID : 98958016259

Status : Answered

Chosen Option : 4

Q.16 Select the most appropriate word for the given group of words.

One who makes and sells sweets and pastries

- Ans
- ☒ 1. grocer
 - ☒ 2. confectioner
 - ☒ 3. cobbler
 - ☒ 4. barber

Question ID : 98958016266

Status : Answered

Chosen Option : 2

Q.17 Given below are four jumbled sentences. Out of the given options pick the one that gives their correct order.

- A. The first person who thought of trading must have been a clever person.
- B. He must have found them easy to carry and exchange for goods.
- C. And gradually paying for things in gold and silver became a regular practice.
- D. When gold and silver were first found people started using them for trade.

- Ans
- ☒ 1. DBCA
 - ☒ 2. BDCA
 - ☒ 3. CDAB
 - ☒ 4. DABC

Question ID : 98958016258

Status : Answered

Chosen Option : 4

Q.18 Select the most appropriate word to fill in the blank.

Government personnel on official trips are _____ to claim reimbursement of their expenses.

- Ans
- ☒ 1. entitled
 - ☒ 2. incited
 - ☒ 3. indicted
 - ☒ 4. invited

Question ID : 98958016271

Status : Answered

Q.19 Select the most appropriate synonym of the given word.

IDEOLOGY

- Ans  1. contract
 2. belief
 3. mark
 4. recognition

Question ID : 98958016261

Status : Answered

Chosen Option : 2

Q.20

Select the most appropriate word to fill in the blank.

The critics were _____ about his remarks on the efficiency of the government and gave many examples to prove they didn't agree with him.

- Ans  1. optimistic
 2. morose
 3. rational
 4. cynical





Question ID : 98958016270

Status : Not Answered

Chosen Option : --

Q.21 Select the correct indirect form of the given sentence.

Uma asked me, "How's your brother?"


- Ans  1. Uma asked me how was my brother.
 2. Uma asked me how your brother was.
 3. Uma asked me how my brother was.
 4. Uma asked me how is my brother.

Question ID : 98958016249

Status : Answered

Chosen Option : 1

Q.22 Select the correctly spelt word

- Ans  1. exection
 2. ecseption
 3. exception
 4. ecxeption





Question ID : 98958016268

Status : Answered

Chosen Option : 3

Q.23 Select the most appropriate option to substitute the underlined segment in the given sentence. If there is no need to substitute it, select No improvement.

Its always advisable put your car into neutral gear when you stop at a traffic signal.

- Ans
-  1. Its always advisable putting
 -  2. It's always advisable to put
 -  3. No improvement
 -  4. It is always advisable for putting





Question ID : 98958016250

Status : Answered

Chosen Option : 2

Q.24 Select the most appropriate option to substitute the underlined segment in the given sentence. If there is no need to substitute it, select No improvement.

What a relief to sit down after walking in the park from a hour!

- Ans
-  1. by an hour
 -  2. No improvement
 -  3. for an hour
 -  4. in a hour





Question ID : 98958016251

Status : Answered

Chosen Option : 3

Q.25 Select the most appropriate word for the given group of words

The art of cleaning and preserving animal skins

- Ans
-  1. etymology
 -  2. taxonomy
 -  3. dermatology
 -  4. taxidermy

Question ID : 98958016267

Status : Answered

Chosen Option : 4